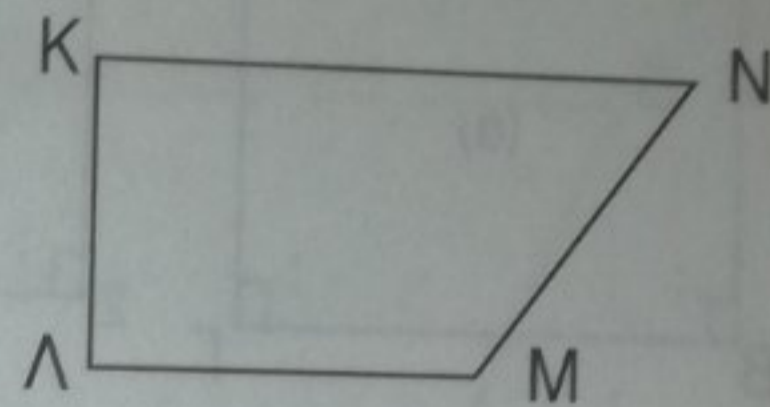





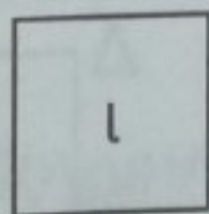
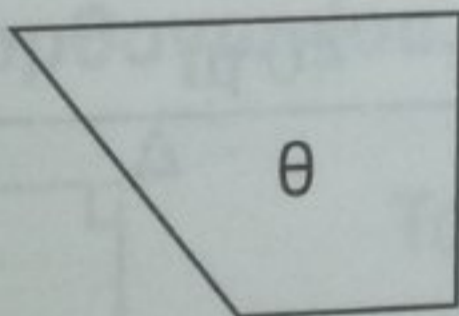
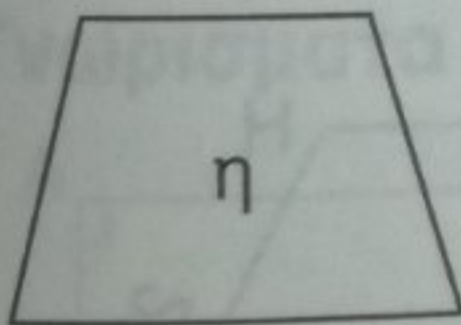
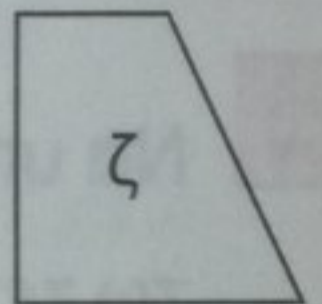
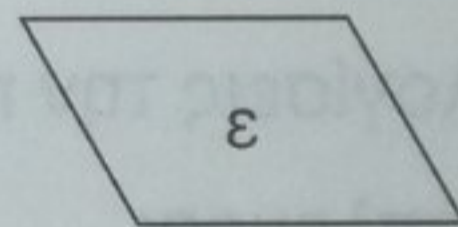
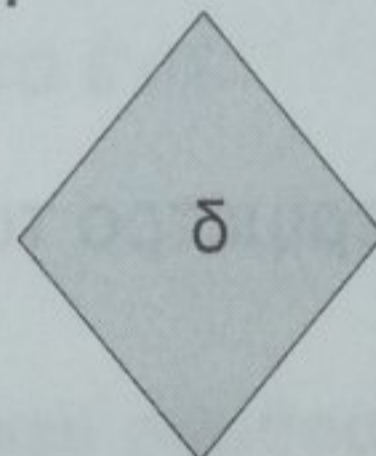



Ασκήσεις και προβλήματα

1 Να ονοματίσεις τα τετράπλευρα και τα κύρια στοιχεία τους:



- | | | |
|-------------------|---------|---------|
| α. όνομα: | α. | α. |
| β. κορυφές: | β. | β. |
| γ. γωνίες: | γ. | γ. |
| δ. πλευρές: | δ. | δ. |

2 Ταξινόμησε τα παρακάτω τετράπλευρα:



- α. Παραλληλόγραμμα:
- i. ορθογώνια:
- ii. τετράγωνα:
- iii. ρόμβοι:
- iv. πλάγια παραλληλόγραμμα:
- β. Τραπεζία:
- i. ισοσκελή:
- ii. ορθογώνια:

3 Χάραξε όλες τις διαγωνίους των παρακάτω τετραπλεύρων και ονομάτισέ τις:

P Y