



1

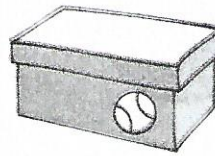

Γράφω τα αθροίσματα που βρίσκω κάθε φορά.

--	--	--	--	--	--

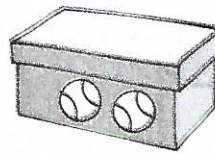

2




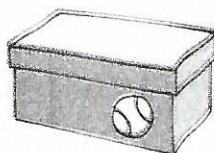

Τα κουτιά έχουν μέσα μπάλες.  
Πόσες είναι όλες μαζί οι μπάλες;



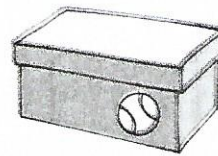


$$4 + 1 = \dots$$



$$\dots + \dots = \dots$$



$$\dots + \dots + \dots = \dots$$



$$\dots + \dots + \dots = \dots$$

1. Ζητούμε από τους μαθητές να υπολογίσουν αθροίσματα που δεν υπερβαίνουν τον αριθμό 5.