



3



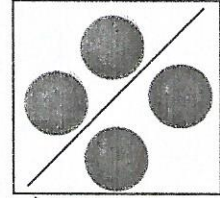
Συμπληρώνω τους αριθμούς που λείπουν.




$$1 + 2 + 1 = \dots$$



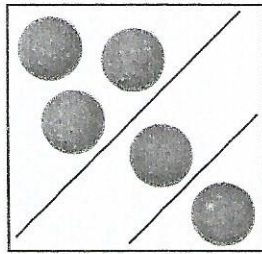
$$\dots = 2 + 1$$




$$4 = \dots + \dots$$



$$\dots + \dots = \dots$$



$$\dots = \dots + \dots + \dots$$



$$\dots = \dots + \dots$$



4

Συμπληρώνω τους αριθμούς, για να ισχύουν οι ισότητες.

$$2 + 1 = \dots$$

$$2 + 0 = \dots$$

$$1 + \dots = 2$$

$$\dots = 4 + 0$$

$$\begin{array}{r} 2 \\ + 3 \\ \hline \dots \end{array}$$

$$\begin{array}{r} 3 \\ + \dots \\ \hline \dots \end{array}$$

$$\begin{array}{r} 2 \\ + \dots \\ \hline \dots \end{array}$$

$$3 + \dots = 5$$

$$\dots = 4 + 1$$