

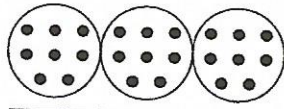



Γράφω δίπλα από
κάθε πολλαπλασιασμό
την σωστή συνεχό-
μεση πρόσθεση.

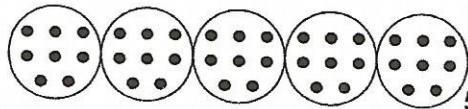
Ο πολλαπλασιασμός του 8


 $1 \cdot 8 = 8$

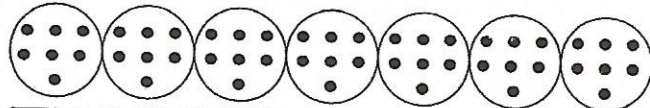
 $2 \cdot 8 = 16$ $8 + 8 = 16$


 $3 \cdot 8 = 24$


 $4 \cdot 8 = 32$


 $5 \cdot 8 = 40$

 $6 \cdot 8 = 48$

 $7 \cdot 8 = 56$

 $8 \cdot 8 = 64$

 $9 \cdot 8 = 72$

 $10 \cdot 8 = 80$